































Animal Coordinates

5						
4						
3						
2						
1						
	A	B	C	D	E	F

Can you find which animal is at the following coordinates?

C1 _____ D5 _____ C2 _____

D3 _____ A5 _____ D1 _____

F5 _____ E2 _____ D2 _____

F3 _____ C5 _____ A4 _____

B2 _____ E4 _____ F2 _____

C3 _____ F1 _____ B5 _____